

Area and Perimeter

Home Link 4-10

NAME _____

DATE _____


TIME _____



Family Note Today your child learned how to play *The Area and Perimeter Game* to practice finding the areas and the perimeters of rectangles.

Please return this Home Link to school tomorrow.

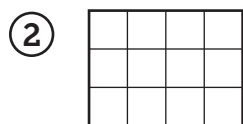
Find the area and the perimeter of each rectangle.



This is a 2-by-8 rectangle.

Area: _____ square units

Perimeter: _____ units



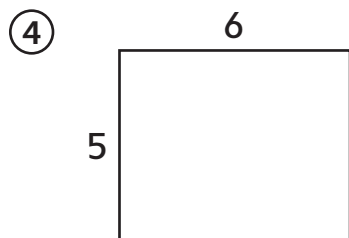
This is a 3-by-4 rectangle.

Area: _____ square units

Perimeter: _____ units

③ What strategies did you use to solve Problem 2?

Try This



This is a 5-by-6 rectangle.

Area: _____ square units

Perimeter: _____ units

What strategies did you use? _____
